

B4

Grades K-2


(1 of 2)

Name _____

Coin Combinations (Option 1)

Directions: Draw a line between the coins and their correct value.

1



Penny Nickel Dime

27 cents


2



Penny Nickel Nickel

25 cents


3



Penny Penny Quarter

11 cents

4



Nickel Dime Dime

16 cents